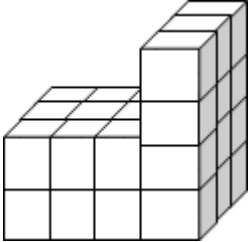




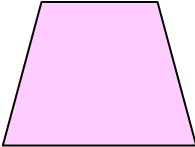


Name:	Date:
<p>Complete the following calculations... MNU 2-03a</p> $\begin{array}{r} 863 \\ + 48 \\ \hline \\ \hline \end{array}$ $\begin{array}{r} 356 \\ - 78 \\ \hline \\ \hline \end{array}$ $\begin{array}{r} 687 \\ \times 5 \\ \hline \\ \hline \end{array}$ $\begin{array}{r} 4 \overline{) 5156} \\ \underline{40} \\ 11 \\ \underline{10} \\ 15 \\ \underline{12} \\ 36 \\ \underline{36} \\ 0 \end{array}$	
<p>Calculate the following volume of the shape below...</p>  <p>Hint: Each cube has a length of 1 cm</p>	MNU 2-11c
<p>The temperature was -4°C. It then ROSE by 6°C. What is the new temperature?</p> 	MNU 2-04a
<p>Using the vocabulary of probability, describe the outcome of the following events...</p> <p>(a) The sun will rise in the morning.</p> <p>(b) The September weekend will be in June next year.</p>  	MNU 2-22a
<p>Name each of the 2D shapes below and state the number of sides and the number of vertices...</p>  	MTH 2-16a
My score:	

