
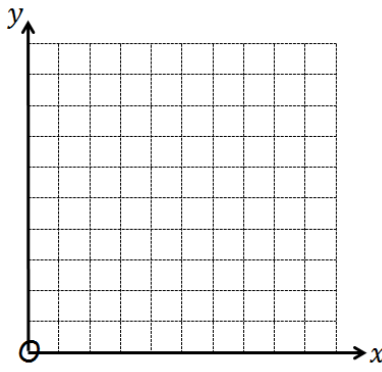
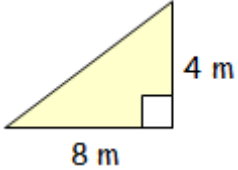


Name:	Date:
<p>Calculate;</p> <p>(a) $436.5 + 258.72$</p> <p>(b) $439.7 - 128.83$</p> <p>(c) 3789.2×7</p> <p>(d) $2686.29 \div 3$</p>	MNU 3-03a
<p>Subtract the following fractions...</p> $2\frac{5}{7} - 1\frac{1}{5}$	MTH 3-07b
<p>Agnes works as a dinner lady and earns £8.30 per hour. She works 7 hours per week. Calculate her weekly wage.</p> 	MNU 3-09b
<p>Plot the following coordinates on the grid shown opposite...</p> <p>(a) A(6, 2)</p> <p>(b) B(10, 1)</p> <p>(c) C(3, 0)</p> <p>(d) D(0, 5)</p>	<p>MTH 3-18a</p> 
<p>Calculate the area of the triangle below...</p> 	MNU 3-11a
My score:	

