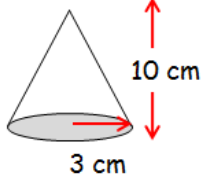
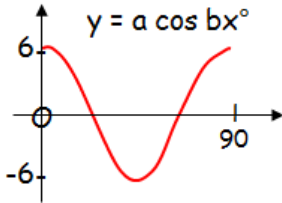



Name:	Date:
<p>Calculate the volume of the following cone... WITHOUT A CALCULATOR!!! You <u>must</u> show all working or no marks!</p> 	E+F 1:4c
<p>Find the equation of the line passing through (1, -2) and (2, 4).</p>	REL 1:1a
<p>For the following trigonometric graphs, write down the values of a and b...</p> 	REL 1:5a
<p>A box of cereal is on special offer. Each box contains 20% more than the standard box.</p>  <p>How many grams does the standard box contain?</p>	APP 1:3a
<p>Sketch the following quadratic function...</p> $y = (x - 1)^2 + 2$	REL 1:2
My score:	

